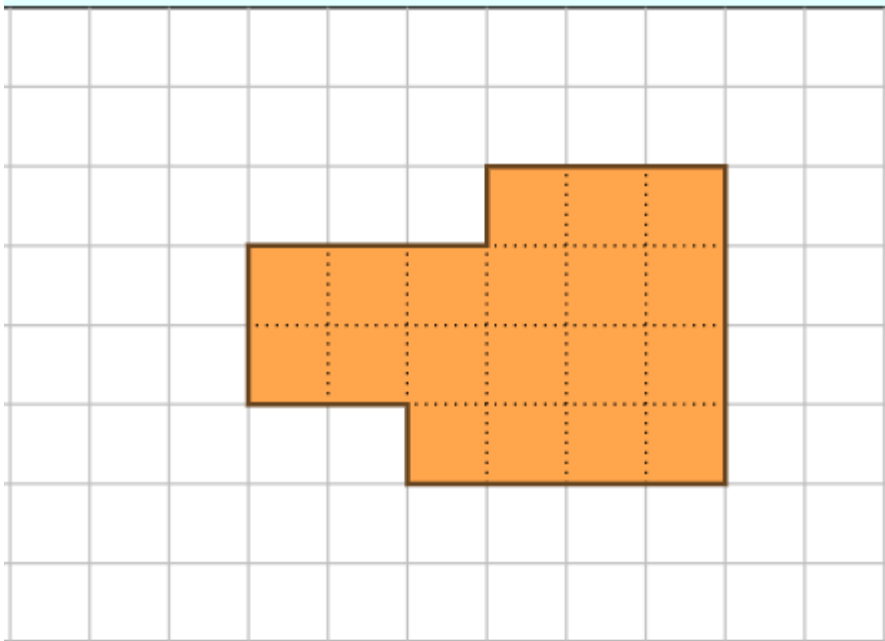


Asha Students Achievement Test (2019 – 20) -- Maths



Student Name		Class	4		
School Name		Date			20

1. Find the perimeter of the figure: The side of each box is 1 cm



Perimeter of this shape is _____ cm

2. Write the numbers in words.

4698 _____

3. Write the short form:

$$6 + 30 + 200 + 8000 = \underline{\hspace{2cm}}$$

4. Fill in the blanks:

8624 = _____ thousands + _____ hundreds + _____ tens + _____ ones

5. Fill in the blanks with an appropriate number to make an even or odd number

6 + _____ = even number

7 + _____ = odd number

6. The sum of two numbers is 20. If one of the numbers is 12, find the other number.

7. Find:

i) 2 7 4 6

ii) 300 + 5432

$$\begin{array}{r} + 3 \ 2 \ 4 \ 1 \\ \hline \\ \hline \end{array}$$

8. Find $9734 - 262$

9. Convert

7 meters into centimetres:


10.i) Write the numbers in ascending order: 4084, 254, 754, 547, 6542

Ascending order: _____

ii) Write the numbers in descending order: 541, 36, 63, 145, 300

Descending order: _____

11. Draw hands in the clock for the given time.



12:25

12. Find the answers:

i)
$$\begin{array}{r} 34 \\ \times 7 \\ \hline \end{array}$$

ii)
$$\begin{array}{r} 84 \\ \times 26 \\ \hline \end{array}$$

13. There are 12 biscuits in a box. How many biscuits are there in 7 boxes?

14. Fill in the blanks:

i) $\underline{\quad} + 2 + 5 = 10$


ii) $15 \times \underline{\quad} = 0$

iii) $1 \times \underline{\quad} = 47$

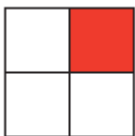
iv) $6 \times 4 = \underline{\quad}$

v) $15 \div 3 = \underline{\quad}$

15. Match



$$\frac{1}{4}$$



$$\frac{2}{6}$$



$$\frac{1}{3}$$

16. Find true (✓) or false (x)

i) $4 + 5 = 5 + 4$ ()

ii) $6 + 0 = 6$ ()

iii) $3 \times 1 = 1$ ()